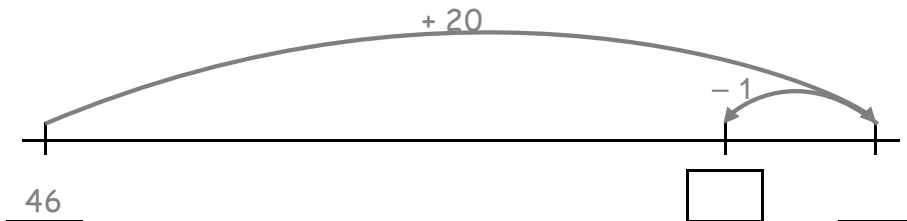


Rechenstrich – Zehnertrick


Addition mit Zehnerübergang

○ **1** Nutze den Rechenstrich.


a) $46 + 19 =$ _____




b) $53 + 29 =$ _____




c) $37 + 39 =$ _____




d) $24 + 59 =$ _____



e) $35 + 49 =$ _____



f) $17 + 69 =$ _____



g) $58 + 29 =$ _____

