




Plusaufgaben am Rechenstrich

- **1** Rechne mit dem Rechenstrich. Zeichne.

$26 + 15 = \underline{\quad}$

$39 + 14 = \underline{\quad}$

$48 + 26 = \underline{\quad}$



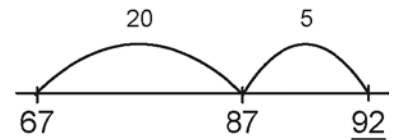
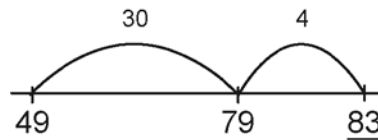
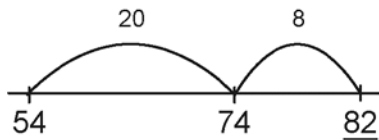
$33 + 27 = \underline{\quad}$

$19 + 32 = \underline{\quad}$

$27 + 17 = \underline{\quad}$



- **2** Welche Plusaufgabe wurde gerechnet?



- **3** Schöne Päckchen. Rechne und setze fort.

$10 + 3 = \underline{\quad}$

$22 + 12 = \underline{\quad}$

$31 + 10 = \underline{\quad}$

$59 + 11 = \underline{\quad}$

$11 + 4 = \underline{\quad}$

$24 + 14 = \underline{\quad}$

$33 + 11 = \underline{\quad}$

$58 + 10 = \underline{\quad}$

$12 + 5 = \underline{\quad}$

$26 + 16 = \underline{\quad}$

$35 + 12 = \underline{\quad}$

$57 + 9 = \underline{\quad}$

$13 + 6 = \underline{\quad}$

$28 + 18 = \underline{\quad}$

$37 + 13 = \underline{\quad}$

$56 + 8 = \underline{\quad}$

$\underline{\quad} + \underline{\quad} = \underline{\quad}$

$\underline{\quad} + \underline{\quad} = \underline{\quad}$

$\underline{\quad} + \underline{\quad} = \underline{\quad}$

$\underline{\quad} + \underline{\quad} = \underline{\quad}$

$\underline{\quad} + \underline{\quad} = \underline{\quad}$

$\underline{\quad} + \underline{\quad} = \underline{\quad}$

$\underline{\quad} + \underline{\quad} = \underline{\quad}$

$\underline{\quad} + \underline{\quad} = \underline{\quad}$

$25 + 24 = \underline{\quad}$

$11 + 11 = \underline{\quad}$

$40 + 20 = \underline{\quad}$

$50 + 29 = \underline{\quad}$

$26 + 23 = \underline{\quad}$

$22 + 11 = \underline{\quad}$

$41 + 21 = \underline{\quad}$

$49 + 28 = \underline{\quad}$

$27 + 22 = \underline{\quad}$

$33 + 11 = \underline{\quad}$

$42 + 22 = \underline{\quad}$

$48 + 27 = \underline{\quad}$

$28 + 21 = \underline{\quad}$

$44 + 11 = \underline{\quad}$

$43 + 23 = \underline{\quad}$

$47 + 26 = \underline{\quad}$

$\underline{\quad} + \underline{\quad} = \underline{\quad}$

$\underline{\quad} + \underline{\quad} = \underline{\quad}$

$\underline{\quad} + \underline{\quad} = \underline{\quad}$

$\underline{\quad} + \underline{\quad} = \underline{\quad}$

$\underline{\quad} + \underline{\quad} = \underline{\quad}$

$\underline{\quad} + \underline{\quad} = \underline{\quad}$

$\underline{\quad} + \underline{\quad} = \underline{\quad}$

$\underline{\quad} + \underline{\quad} = \underline{\quad}$