


Minusaufgaben am Rechenstrich

- **1** Rechne mit dem Rechenstrich. Zeichne.

$86 - 39 = \underline{\quad}$

$53 - 28 = \underline{\quad}$

$71 - 45 = \underline{\quad}$



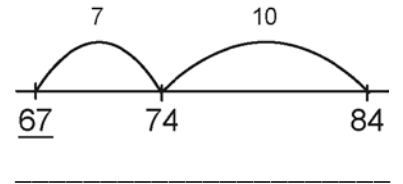
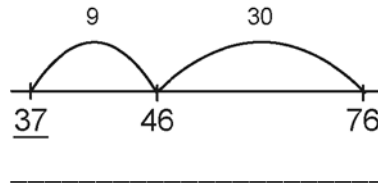
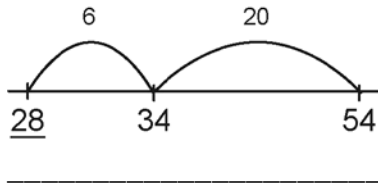
$62 - 14 = \underline{\quad}$

$46 - 39 = \underline{\quad}$

$93 - 55 = \underline{\quad}$



- **2** Welche Minusaufgabe wurde gerechnet?



- **3** Schöne Päckchen. Rechne und setze fort.

$50 - 8 = \underline{\quad}$

$30 - 7 = \underline{\quad}$

$75 - 32 = \underline{\quad}$

$49 - 21 = \underline{\quad}$

$52 - 8 = \underline{\quad}$

$28 - 7 = \underline{\quad}$

$76 - 33 = \underline{\quad}$

$48 - 22 = \underline{\quad}$

$54 - 8 = \underline{\quad}$

$26 - 7 = \underline{\quad}$

$77 - 34 = \underline{\quad}$

$47 - 23 = \underline{\quad}$

$56 - 8 = \underline{\quad}$

$24 - 7 = \underline{\quad}$

$78 - 35 = \underline{\quad}$

$46 - 24 = \underline{\quad}$

$\underline{\quad} - \underline{\quad} = \underline{\quad}$

$\underline{\quad} - \underline{\quad} = \underline{\quad}$

$\underline{\quad} - \underline{\quad} = \underline{\quad}$

$\underline{\quad} - \underline{\quad} = \underline{\quad}$

$59 - 24 = \underline{\quad}$

$90 - 78 = \underline{\quad}$

$99 - 88 = \underline{\quad}$

$100 - 50 = \underline{\quad}$

$57 - 26 = \underline{\quad}$

$80 - 68 = \underline{\quad}$

$88 - 77 = \underline{\quad}$

$99 - 51 = \underline{\quad}$

$55 - 28 = \underline{\quad}$

$70 - 58 = \underline{\quad}$

$77 - 66 = \underline{\quad}$

$98 - 52 = \underline{\quad}$

$53 - 30 = \underline{\quad}$

$60 - 48 = \underline{\quad}$

$66 - 55 = \underline{\quad}$

$97 - 53 = \underline{\quad}$

$\underline{\quad} - \underline{\quad} = \underline{\quad}$

$\underline{\quad} - \underline{\quad} = \underline{\quad}$

$\underline{\quad} - \underline{\quad} = \underline{\quad}$

$\underline{\quad} - \underline{\quad} = \underline{\quad}$