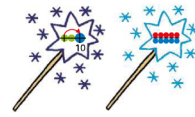


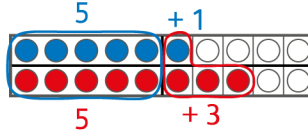
Über den Zehner: Zuerst zur 10, zuerst die 5er



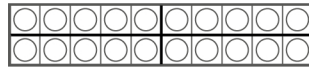
Datum: _____

12  Zuerst die 5er. Zeichne ein.

$6 + 8$



$7 + 5$



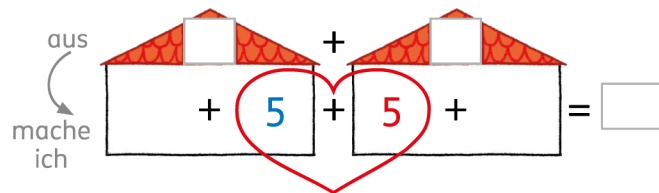
$8 + 9$



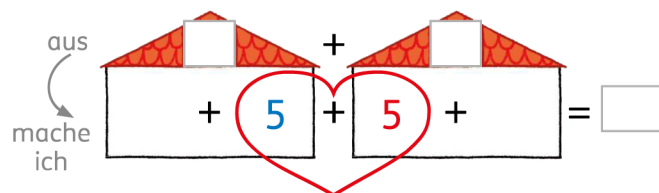
$5 + 8$



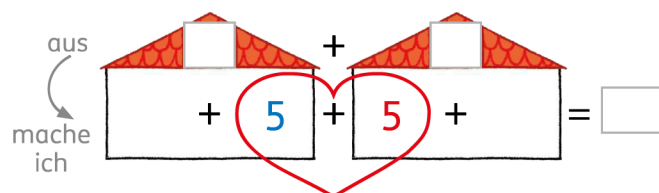
$6 + 8$



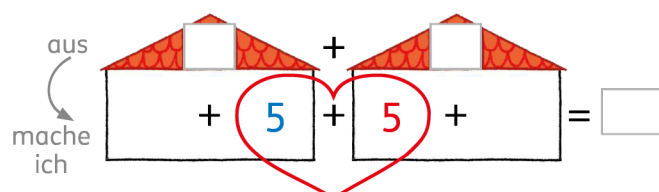
$7 + 5$



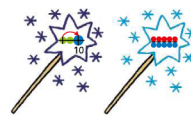
$8 + 9$



$5 + 8$



Über den Zehner: Zuerst zur 10, zuerst die 5er



Datum: _____

13 Rechne geschickt.

$1 + 3 + 9 = \square$

$6 + 2 + 4 = \square$

$5 + 2 + 5 = \square$

$9 + 7 + 3 = \square$

$4 + 6 + 8 = \square$

$4 + 6 + 5 = \square$

$6 + 8 + 2 = \square$

$7 + 7 + 3 = \square$

$5 + 5 + 5 = \square$

$0 + 2 + 10 = \square$

Datum: _____

14 Rechne geschickt.

$5 + 5 + 3 + 4 = \square$

$2 + 3 + 5 + 5 = \square$

$5 + 4 + 1 + 5 = \square$

$3 + 5 + 4 + 5 = \square$

$2 + 1 + 5 + 5 = \square$

$5 + 3 + 4 + 5 = \square$

$1 + 5 + 4 + 5 = \square$